

DOYEN

KENYA JUNIOR SCHOOL EDUCATION ASSESSMENT



TERM 1 2025 OPENER EXAM

GRADE 9 – CREATIVE ARTS & SPORTS

Time: 2 hours

NAME: _____

SCHOOL: _____

STREAM: _____ DATE: _____

INSTRUCTIONS

- a) Write your name, school, stream and date in the spaces provided above.
- b) Answer **all** questions in this booklet.
- c) All answers must be given as per the guidelines of the questions.
- d) All answers **must** be written in this booklet.

ASSESSMENT RUBRIC

RANGE (%)	LEVEL
80 - 100	Exceeding expectation
60 - 79	Meeting expectation
40 - 59	Approaching expectation
0 - 39	Below expectation

LEARNER'S SCORE

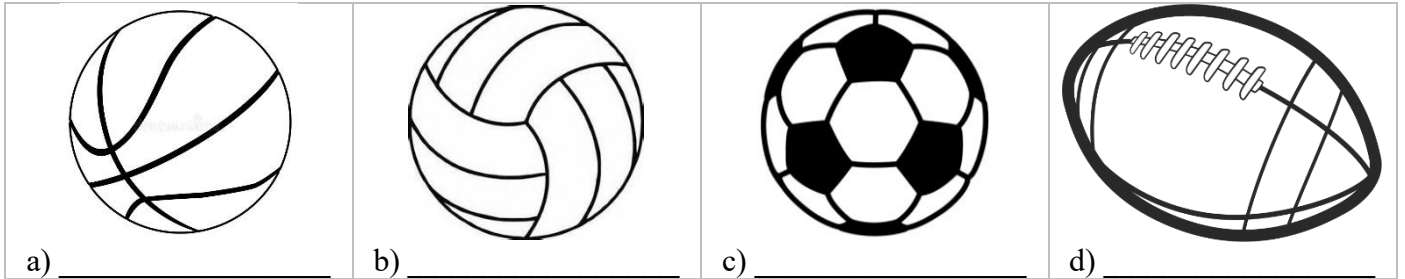
Out of 50	
Score	
%	

This paper consists of 4 printed pages. Candidates should check the question paper to confirm that all pages are printed as indicated and that no questions are missing.

1. State **three** components of Creative Arts and Sports. (3 marks)

2. State **two** main elements of a story. (2 marks)

3. Name the sports in which the following balls are used. (4 marks)



4. Differentiate between fitness and agility as used in Creative Arts and Sports. (2 marks)

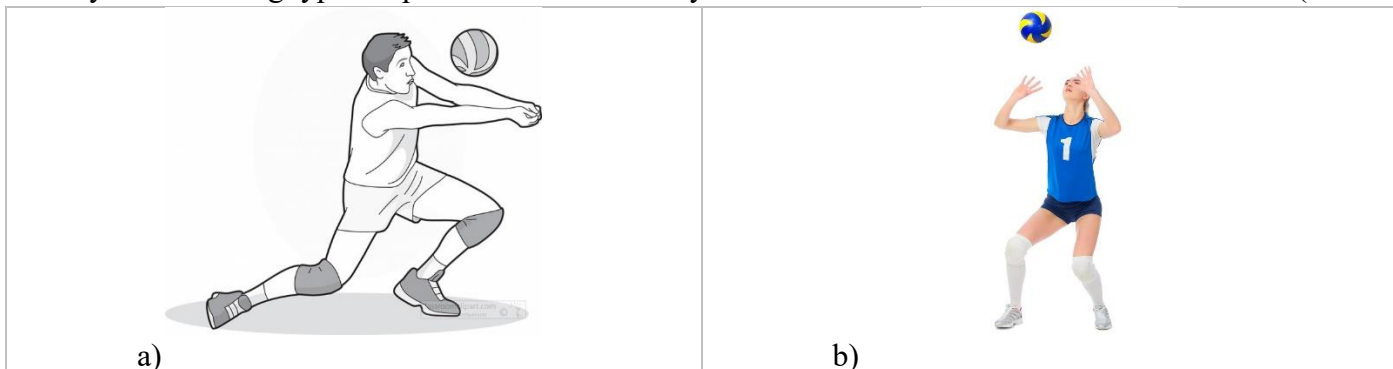
5. State **two** examples of middle-distance races. (2 marks)

6. List **three** safety measures to observe when performing a high jump. (3 marks)

7. State **two** types of dodging techniques used in the game of netball. (2 marks)

8. Name any **two** defensive skills in Kabaddi. (2 marks)

9. Identify the following types of passes as used in volley ball. (2 marks)



10. Define the term marking as used in the netball game. (2 marks)

11. What is breast stroke swimming? (2 marks)

12. List **three** types of beads used in beadwork. (3 marks)

13. Give **three** importance of Music as a subject. (3 marks)





14. Define the term rhythm as used in creative arts. (3 marks)

15. Give **three** qualities of a good melody.

(3 marks)

16. Identify the following music notes as either *crotchet*, *minim*, *quaver* or *semi-quaver*.

(4 marks)

			
a) _____	b) _____	c) _____	d) _____

17. What are the functions of a soloist in a song performance?

(3 marks)

18. Name **two** traditional musical instruments in Kenya.

(2 marks)

19. In the space below, draw a dotted quaver and semi-quaver together and also write its French rhythm. (3 marks)

THIS IS THE LAST PRINTED PAGE

L'avenir commence ici