

DOYEN PUBLISHERS
KENYA JUNIOR SCHOOL EDUCATION ASSESSMENT
END TERM I 2025 JOINT EXAM
GRADE 7
CREATIVE ARTS & SPORTS



Time: 1 hour 40 mins

NAME: _____
 SCHOOL: _____
 STREAM: _____ DATE: _____

INSTRUCTION

- a) Write your name, school, stream and date in the spaces provided above.
- b) This paper consists of two sections: **A** and **B**.
- c) **Section A** comprises Multiple Choice Questions numbered 1 to 30.
- d) **Section B** comprises short structured questions number 31 to 40.
- e) Answer **ALL** the questions in section A in the table provided below.
- f) Answer **ALL** questions in section B in the space provided in the question paper.
- g) Do **NOT** remove any page from this question paper. Answer **ALL** questions in English.

ANSWER SHEET – SECTION A

1.	2.	3.	4.	5.	6.	7.	8.	9.	10.	11.	12.	13.	14.	15.	16.	17.	18.	19.	20.
21.	22.	23.	24.	25.	26.	27.	28.	29.	30.										

LEARNER'S SCORE

QUESTIONS	SCORES	TOTAL
A (Out of 30)		
B (Out of 40)		

This paper consists of 6 printed pages. Candidates should check the question paper to confirm that all pages are printed as indicated and that no questions are missing.





SECTION A (40 marks)

Answer ALL questions in this section in the space provided on the first page.

1. What is a collage?
 - A. A painting made with oil paints
 - B. A work of art created by assembling different materials.
 - C. A sculpture made from clay
 - D. A type of dance performance

2. Which of the following is NOT typically used in a collage?
 - A. Photographs
 - B. Paint
 - C. Newspaper clippings
 - D. Clay

3. Which of the following is an example of visual art?
 - A. Sculpture
 - B. Ballet
 - C. Music composition
 - D. Acting

4. Which of the following instruments would be most commonly found in a concert band?
 - A. 
 - B. 
 - C. 
 - D. 

5. What is the treble staff used for?
 - A. To notate lower-pitched instruments
 - B. To notate higher-pitched instruments
 - C. To notate rhythm only
 - D. To notate melody and harmony

6. In which scale does the note C appear as the first note?
 - A. C major scale
 - B. G major scale
 - C. F major scale
 - D. D major scale

7. What is the primary function of the setting in a story?
 - A. To provide music
 - B. To introduce the characters
 - C. To establish the time and place where the story occurs
 - D. To show the theme of the story

8. What does the plot of a drama generally consist of?
 - A. A series of actions that build tension and resolve conflicts
 - B. The costumes worn by actors
 - C. The music score
 - D. The lighting and sound design

9. Which of the following is NOT a component of a film's production?
 - A. Scriptwriting
 - B. Camera work
 - C. Audience participation
 - D. Editing

10. What is the main role of a costume designer in a drama?
 - A. To represent the setting
 - B. To help actors portray their characters
 - C. To decorate the stage
 - D. To provide lighting

11. Strength in a class is mostly associated with which type of exercise?
 - A. Weightlifting
 - B. Jogging
 - C. Swimming
 - D. Cycling

12. The picture below is:



- A. starting a race
 - B. continuing with the race
 - C. finishing a race
 - D. gaining momentum in a race

13. What is the term for a physical activity performed to improve one's fitness?
- Workout
 - Game
 - Dance
 - Competition
14. Which of the following best describes coordination in sports?
- The ability to stay still during a competition
 - The ability to endure physical activity for long periods
 - The strength required to lift heavy objects
 - The ability to perform movements in a controlled and efficient manner
15. Which of the following is an important aspect when combining music and dance?
- Attire
 - Rhythm and movement synchronization
 - Audience seating
 - Teamwork
16. Which of the following best describes a relationship between drama and visual arts?
- Both disciplines rely on the audience's participation
 - Visual arts have no relation to drama
 - Drama uses props and scenery that are often created by visual artists
 - Drama is always performed in an art gallery
17. What is the main focus of the theme in both drama and music?
- The performers' attire
 - The main message or moral conveyed
 - The use of props
 - The rhythm of the performance
18. How do visual artists, musicians and dancers work together in a performance?
- They each perform separately with no connection
 - They collaborate to create a unified performance
 - Visual artists perform while musicians and dancers remain in the audience
 - Only dancers and musicians collaborate, not visual artists
19. Which note has the longest duration?
- Crotchet
 - Semibreve
 - Quaver
 - Minim
20. What is the setting in a story?
- The time and place where the story occurs
 - The events that happen in the story
 - The main character's goal
 - The underlying message of the story
21. The ball drawn below is used in:
- 
- Basketball
 - Volleyball
 - Netball
 - Handball
22. The theme of a story refers to:
- The protagonist's journey
 - The underlying message or lesson
 - The setting and location
 - The actions and decisions of supporting characters
23. Which of the following best describes the character in a story?
- The events that shape the plot
 - The place and time of the story
 - The individuals who interact to drive the story
 - The conflict between protagonists and antagonists
24. What is the symbol for a semibreve note?
- A vertical line
 - A small horizontal line
 - A dot above the line
 - A large horizontal line
25. What is the duration of a quaver note?
- One beat
 - Two beats
 - One beat
 - Four beats
26. What does the major scale consist of?
- Only sharp notes
 - Only natural notes
 - Both sharp and flat notes
 - A mix of sharps and flats with one flat note
27. How many ledger lines are there in a treble clef for a C note above the staff?
- One
 - Two
 - Three
 - None

28. Which of the following notes appears on the second line of the treble clef?
 A. C B. D C. E D. F

29. What does **pitch** refer to in music?
 A. The speed of the music
 B. The length of the note
 C. The frequency of the sound, determining how high or low it is
 D. The rhythm of the notes

30. What is the keyboard note for middle C?
 A. The first white key on the left
 B. The white key directly left of the two black keys
 C. The last white key on the keyboard
 D. The black key between D and E

SECTION B (40 marks)

Answer All questions in this section in the spaces provided after each question.

31. Creative Arts and Sports has integrated learning areas.

a) Name **three** components of Creative Arts and Sports.

(3 marks)

b) State **four** benefits of Creative Arts and Sports.

(4 marks)

c) List **three** careers related to the study of Creative Arts and Sports.

(3 marks)

32. Explain the following elements of a story. (8 marks)

a) Character

b) Setting

c) Plot

d) The

33. Using your pencil, draw a graduation cap. (10 marks)



34. Draw the following notes. (12 marks)

minim	Crotchet	Semibreve
-------	----------	-----------



THIS IS THE LAST PRINTED PAGE